

SCHOOL-SCOUT.DE

Unterrichtsmaterialien in digitaler und in gedruckter Form

Auszug aus:

Volumen von Würfeln und Quadern

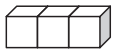
Das komplette Material finden Sie hier:

School-Scout.de

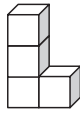


Würfelgebäude

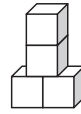
① Moritz hat mit Würfeln gebaut. Schreibe auf, wie viele Würfel er benutzt hat.



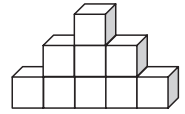
Würfel



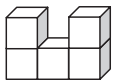
Würfel



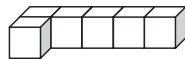
Würfel



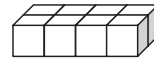
Würfel



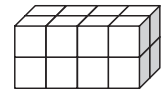
Würfel



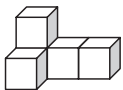
Würfel



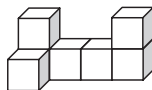
Würfel



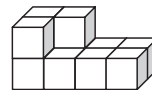
Würfel



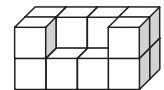
Würfel



Würfel

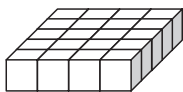


Würfel

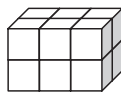


Würfel

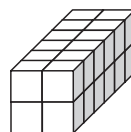
② Aus wie vielen Würfeln bestehen Emilys Bauwerke?



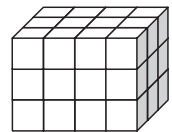
Würfel



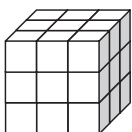
Würfel



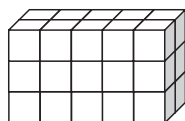
Würfel



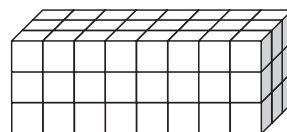
Würfel



Würfel



Würfel



Würfel

SCHOOL-SCOUT.DE



Unterrichtsmaterialien in digitaler und in gedruckter Form

Auszug aus:

Volumen von Würfeln und Quadern

Das komplette Material finden Sie hier:

School-Scout.de

