

SCHOOL-SCOUT.DE

Unterrichtsmaterialien in digitaler und in gedruckter Form

Auszug aus:

*Plus- und Minusaufgaben im Zahlenraum bis 10 in der
Förderschule*


Das komplette Material finden Sie hier:

School-Scout.de




Der Zauberer Peter Plus


- Was zaubert Peter Plus? Schau genau und rechne!




Zuerst liegen 3 Äpfel auf dem Brett.



Dann zaubert Peter Plus 1 Apfel dazu.

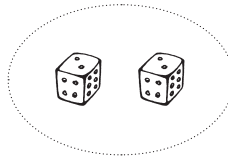


Zuletzt sind ... Äpfel auf dem Brett.




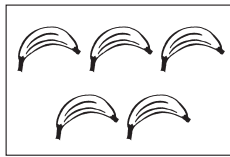


+



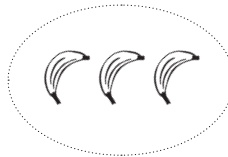
=



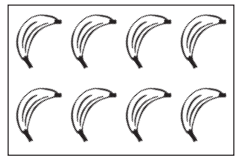


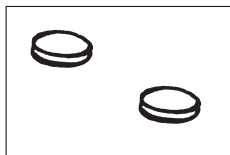


+



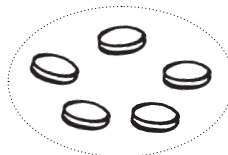
=



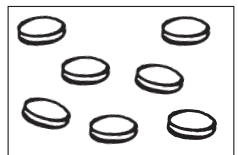


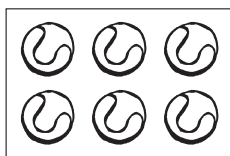


+



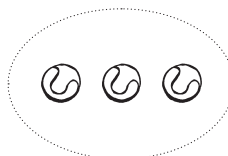
=



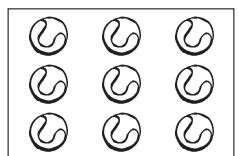


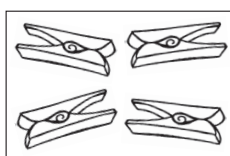



+



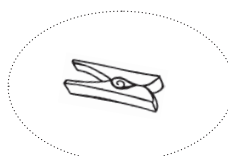
=



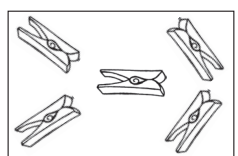




+





















=



Wir rechnen Plus-Aufgaben bis 10

- Schau genau und rechne!















| | |
|--|---|
|  $5 + 2 = \square$ |  $3 + 6 = \square$ |
|  $2 + 5 = \square$ |  $3 + 7 = \square$ |
|  $4 + 3 = \square$ |  $2 + 4 = \square$ |
|  $2 + 7 = \square$ |  $3 + 5 = \square$ |
|  $5 + 4 = \square$ |  $6 + 4 = \square$ |
|  $9 + 0 = \square$ |  $4 + 1 = \square$ |
|  $2 + 6 = \square$ |  $6 + 3 = \square$ |
|  $6 + 0 = \square$ |  $8 + 1 = \square$ |
|  $7 + 3 = \square$ |  $5 + 5 = \square$ |

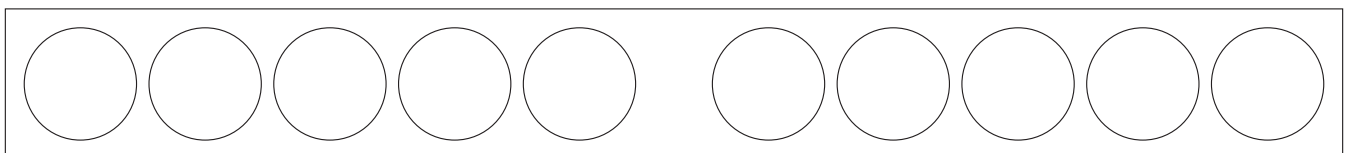

Wir rechnen Plus-Aufgaben bis 10

① Male die Plättchen rot und blau an und rechne!



| | |
|--|---|
|  $5 + 3 = \square$ |  $2 + 6 = \square$ |
|  $9 + 1 = \square$ |  $1 + 5 = \square$ |
|  $2 + 3 = \square$ |  $6 + 4 = \square$ |
|  $3 + 7 = \square$ |  $8 + 2 = \square$ |
|  $2 + 4 = \square$ |  $5 + 4 = \square$ |
|  $6 + 0 = \square$ |  $1 + 3 = \square$ |

② Lege die Aufgabe mit deinen Plättchen und rechne!

| | | | | |
|---|---|---|---|--|
| 5 | + | 4 | = | |
| 0 | + | 9 | = | |
| 2 | + | 1 | = | |

| | | | | |
|---|---|---|---|--|
| 3 | + | 2 | = | |
| 1 | + | 6 | = | |
| 2 | + | 2 | = | |

SCHOOL-SCOUT.DE

Unterrichtsmaterialien in digitaler und in gedruckter Form

Auszug aus:

*Plus- und Minusaufgaben im Zahlenraum bis 10 in der
Förderschule*

Das komplette Material finden Sie hier:

School-Scout.de

